

Tuesday Homework

Name:

Date:

Math focus 5 Chapter 2 Mid-Chapter Review Answer Key





Goal: Represent and round six-digit numbers.

Practice

Lesson 1

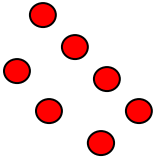
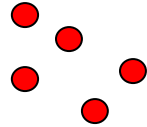




1. Model each number on a place value chart. Then write each number in standard form.

a) two hundred fifteen thousand seventy

Thousands			Units		
H	T	O	H	T	O
					

Standard form: **215 070**



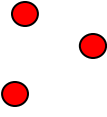
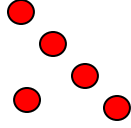
b) seven hundred fifty-four thousand three hundred twenty-six

Thousands			Units		
H	T	O	H	T	O
					

Standard form: **754 326**

There's one more on the next page!

c) one hundred thirty-three thousand five hundred

Thousands			Units		
H	T	O	H	T	O
					

Standard form: **133 500**

Wednesday Homework Name:

Date:

Math focus 5 Chapter 2 Mid-Chapter Review

Goal: Represent and round six-digit numbers.

Practice

Lesson 2

2. Shannon wrote three numbers in expanded form.

a) $500\,000 + 80\,000 + 700 + 6$ **580 706**

b) $500\,000 + 80\,000 + 1000$ **581 000**

c) $500\,000 + 70\,000 + 200 + 90 + 9$ **570 299**

Write these numbers in standard form. Then arrange them in order from **least to greatest**.

570 299 580 706 581 000

3. Rebecca research the attendance for some women's basketball games.

WNBA Attendance	
Week	Total attendance
1	160 279
2	89 631
3	116 981
4	111 304
5	123 126
6	125 202

a) Arrange the attendance figures in order from least to greatest.

89 631

111 304

116 981

123 126

125 202

160 279

Turn over the page!

